


English Task 1:

You are the chief of police. Write a letter to the house owners explaining what you will do about the disruption caused by the frogs.

Use the pictures to help you.



Police Department
15th Street,
Forest Gate
E7 9JQ

Dear residents,

I am writing to inform you of the plan I have ...

Last Tuesday, we were visited by ...

After receiving your letter, I know ...

Spellings

	Copy	Cover	Check
treasured			
treasuring			
measurement			
measuring			
leisurely			
capturing			

Maths Task 1:

Multiplication and division word problems

Identify the Key numbers and words

Do you need to multiply (X) or divide (÷)

Use the correct method to find your answer.

$$\begin{array}{r} 54 \\ \times 5 \\ \hline 270 \\ +2 \end{array}$$

$$\begin{array}{r} 32 \\ \div 3 \\ \hline 96 \\ 9 \downarrow \\ 06 \\ 6 \\ \hline 0 \end{array}$$

A

There are 8 chocolates in a bag and Josephine has 6 bags to sell. How many chocolates are there in total?

I bought 63 eggs to bake some cakes. I used 7 eggs in each cake. How many cakes did I make?

I got £78 for my birthday. I spent half on the weekend. How much money have I got left?

Sally bought 3 photograph frames, each costing £7.50. How much did she spend altogether?

B

Apples are cut into 8 pieces to be shared among some children. 154 apples were used. How many pieces of apple are cut?

A teacher asks her class to set the chairs out in 12 rows of 8. How many chairs will be set out?

A photo album has 78 pages. Each page can hold 6 photos. How many photos can the album hold in total?

One watch costs £1.60 and I bought four. How much money have I spent?

Sidney parents gave him the same amount of pocket money each week. He saved £161 over 9 weeks. How much pocket money did Sidney get each week?

C

Queens market has 37 packs of bananas on the stall. Each pack contains 7 bananas. How many bananas are on the stall altogether?

Envelopes are sold in packs of 9. The post office sells 135 packs in one day. How many envelopes does the post office sell?

A library has forty-two shelves. Each shelf holds nine books. How many books are in the library in total?

I got £325 from my grandparents for my birthday. My parents decided to double the amount. How much money did I receive for my birthday?

Brian collects an equal amount of football stickers each day. At the end of 1 week, he has collected 175 football stickers. How many stickers does he collect each day?

If I share 48 sweets equally with four friends, how many sweets would they have?

Topic Task 1:

R.E Catch up

WALT explore stories and sayings that have made us stop and think.

Here are some sayings. Choose two and discuss what the saying means to you. How does it make you think?

Treat others as you would like them to treat you.

All things are difficult before they are easy

Don't judge a book by its cover.

There are two sides to every story

Health is better than wealth.

Task

Give 3 reasons each as to why it has made you stop and think. Please copy the saying and then write in full sentences.

"Treat others as you would like them to treat you."

This saying made me think about...

I learnt that...

It also tells me...

English Task 2:

Write a diary entry for half term. Use the questions below to guide your writing.

- What have you done?
- Who were you with?
- Where have you been?
- What did you see, taste, hear?
- How did you feel today?

Challenge: Explain what your favourite day was this week and why.

Date: Monday 26th October 2020

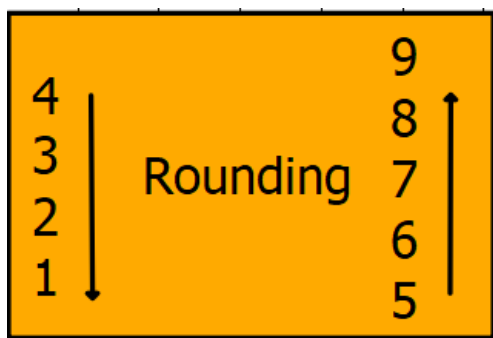
Dear diary,

Spellings

	Definition	Create a sentence
treasured		
treasuring		
measurement		
measuring		
leisurely		
capturing		

Maths Task 2:

Rounding to the nearest 10, 100 and 1000




TH	H	T	O

* Identify the digit you need to round

* Look at the digit on the right -
does this number round up or down?

E.g. 73 Rounded to the nearest 10 = 70



A

Round the following to the nearest 10:

23 =

33 =

75 =

85 =

12 =

Round the following to the nearest 100:

120 =

140 =

170 =

235 =

B

Round the following to the nearest 10:

53 =

83 =

125 =

15 =

232 =

Round the following to the nearest 100:

120 =

149 =

130 =

219 =

What is 1257 rounded to the nearest Ten, 100 and Thousand?

C

What is 93 rounded to the nearest ten?

309 rounded to the nearest 10 is
300, 10, 310 or 319

Round 64 to the nearest 10.

What is 720 rounded to the nearest hundred?

1231 rounded to the nearest 100 is
1231, 1200 or 1300

Round 2650 to the nearest 100.

What is 1267 rounded to the nearest thousand?

2809 rounded to the nearest 1000 is
3000, 2900, 2009 or 2000

Round 12121 to the nearest 1000.

Topic Task 2:

PSHE

Draw a picture of yourself surrounded by the people who make you happy



Label the picture or write sentences to say why they make you happy